



1

Entoure l'objet le plus lourd.

Le vase ou la bouteille d'eau ?

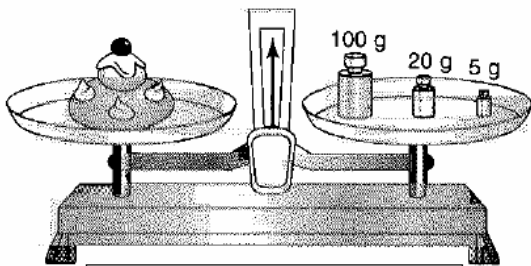


La salade ou le lapin ?

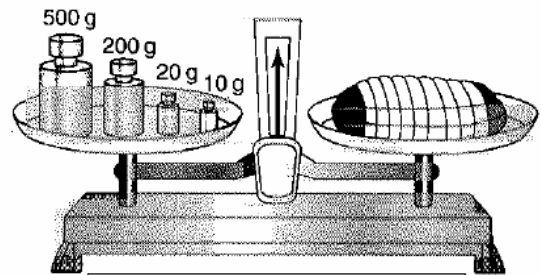


2

Calcule la masse du gâteau et de la viande.




..... 125 g



..... 730 g

3

Regarde bien le dessin des balaces et range les objets du plus léger au plus lourd.



1. GATEAU

3. SUCRE

2. FROMAGE

4. EAU