


1

Entoure le poids qui te semble le mieux convenir




une feuille de papier :

1mg - **1g** - 1hg



un cartable :

5g - 5 dag - **5 kg** - 50 kg




60 dg - 60dag - 60hg




une voiture :

1200 g - 1200 dag - **1200kg**



une bouteille :

1hg - **1kg** - 10kg

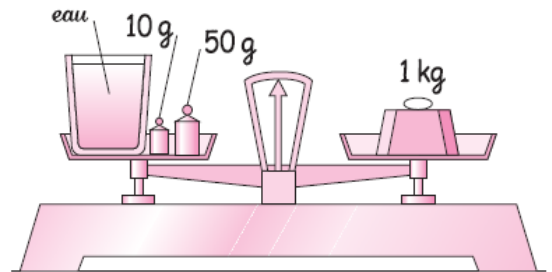
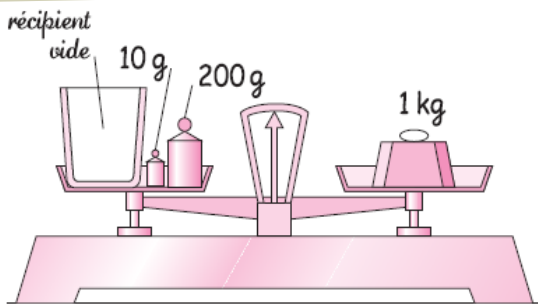


un éléphant :

50kg - 500kg - **5tonnes**

2

Problème



Quel est le poids du récipient vide ? _____

Quelle masse d'eau a-t-on ajouté dans le récipient ? _____

2

Convertis

3045g = **3**kg + **45**g

407g = **0**kg + **407**g

1200g = **1**kg + **200**g

24080g = **24**kg + **80**g

899dag = **8**kg + **990**g

18hg = **1**kg + **800**g

8kg = **8000**g

7hg = **700**g

41hg = **4100**g

4dag = **40**g

7g = **700**cg

3dg = **30**cg

2 tonnes = **2000**kg

6hg = **60**dag

32g = **320**dg